

1. IS THE RHYTHM OF LINE 2 THE **SAME** OR **DIFFERENT** AS LINE 1? (circle one)

2. IS THE MELODY OF LINE 2 THE **SAME** OR **DIFFERENT** AS LINE 1? (circle one)

Can you answer these two questions?

## DAY 1: Russian Sailor Dance

**DON'T  
PRACTICE  
THIS!**

3  
1

*f*

2

1

3

5

3  
2



# DAY 3: Russian Sailor Dance

**DON'T  
PRACTICE  
THIS!**

Musical notation for Day 3, measures 1-3. Treble clef, 4/4 time. Bass clef, 4/4 time. Dynamics: *mf*. Fingerings: 1, 2, 1.

Musical notation for Day 3, measures 4-6. Treble clef, 4/4 time. Bass clef, 4/4 time. Fingerings: 3, 1.

# DAY 4: Russian Sailor Dance

Musical notation for Day 4, measures 1-3. Treble clef, 4/4 time. Bass clef, 4/4 time. Dynamics: *f*. Fingerings: 1, 2.

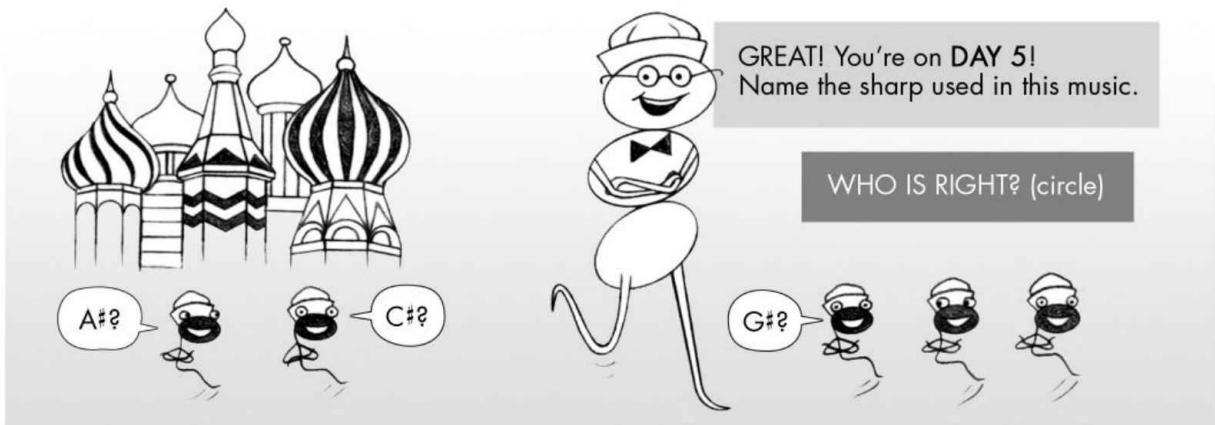
Circle the answer for each rest in the sailor hat.

quarter  
half  
whole

quarter  
half  
whole

quarter  
half  
whole

based on Lesson Book p. 39



GREAT! You're on DAY 5!  
Name the sharp used in this music.

WHO IS RIGHT? (circle)


A#?

C#?

G#?

## DAY 5: Russian Sailor Dance


**DON'T  
PRACTICE  
THIS!**




1

*mf*

2



5



9

*f*